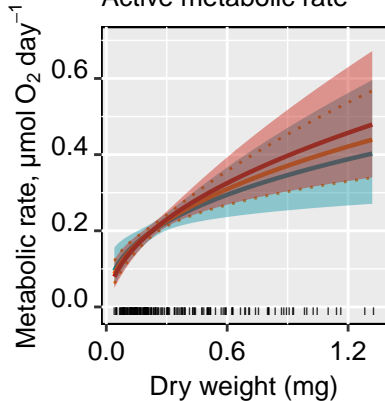


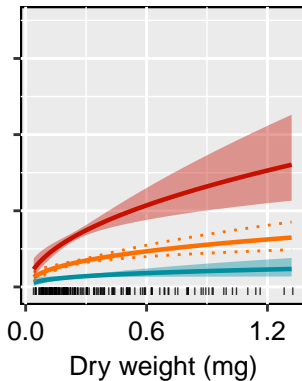
a)

Active metabolic rate



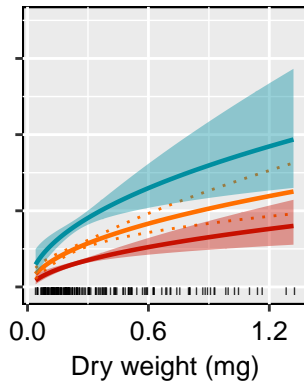
b)

Resting metabolic rate



c)

Aerobic scope

Temperature  $^{\circ}\text{C}$ : — 0 — 3 — 6